

A photograph of two goats in a wire enclosure. The goat on the left is white with a dark brown face and neck. The goat on the right is white with a dark brown face and neck. They are standing on a bed of dark brown mulch. The background is a wire mesh fence.

GOAT INDUSTRY

NEXT

The demand for goat meat is primarily based on :

- A. the goat producers**
- B. ethnic and religion**
- C. income levels**
- D. population**

Goat meat is most commonly called:

- A. chevon**
- B. mutton**
- C. bison**
- D. venison**

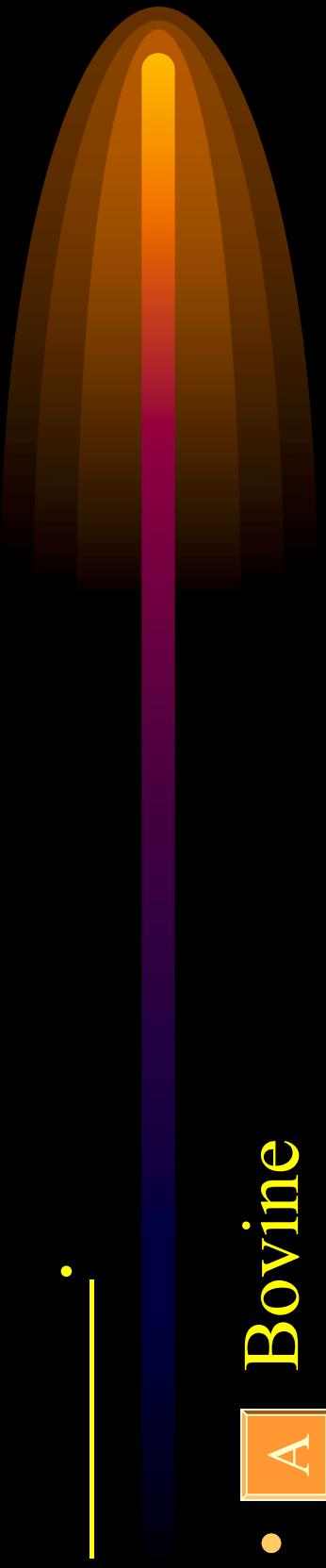
Goat meat has:

- A less saturated fat than chicken, beef, pork, or lamb
- B the same amount of protein as beef
- C excellent ratio of polyunsaturated to saturated fats
- D All the above

The Scientific name for goats is

_____.

- A Bovine
- B Equine
- C Caprine
- D Porcine



It is estimated there are nearly one million meat goats in the United States, most are in _____.

- A Georgia**
- B Kentucky**
- C Texas**
- D Mississippi**

The goat carcass is different than the lamb carcass because:

- A** it is much leaner
- B** it has more subcutaneous fat and muscular fat
- C** bone structure and muscle position is quite different
- D** None of the Above

The average dressing percentage of a goat is :

- A 35 %
- B 45 %
- C 60%
- D 75%

The largest cut of meat in a goat is the _____.

- A shoulder
- B loin
- C rack
- D leg


The most valuable and most tender cut of goat meat is :

- A** shoulder
- B** loin
- C** rack
- D** leg

The USDA Grades for slaughter goats are:

- A Prime, Choice, Select, Standard
- B Selection #1, #2, #3, #4
- C Prime, Choice, Good, Select
- D Choice, Good, Utility, Select

What wholesale cut do we get chops from?



- A Shoulder
- B Sirloin
- C Leg
- D Loin

*All of these are breeds of fiber goats
except _____.*

A

LaMancha

B

Cashmere

C

Angora

As your kid gets fatter, will dressing percentage get higher or lower?

A

Higher

B

Lower

What is meat from a goat called?

A

Mutton

B

Veal

C

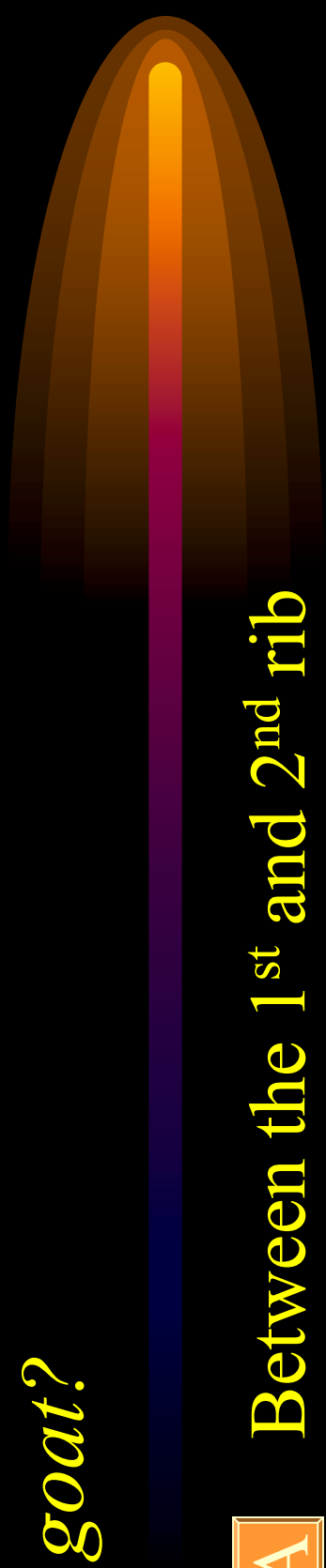
Beef

D

Chevon

NEXT

Where do you measure fat thickness on a goat?



- A Between the 1st and 2nd rib
- B Between the 3rd and 4th rib
- C Between the 12th and 13th rib
- D Between the 6th and 7th rib

What are the USDA grades of goat carcasses?

A

Prime, Choice, Select, Standard, Utility

B

Very Good, Good, Fair, Poor


C

#1, #2, #3, #4

D

Above Average, Average, Below Average

How are USDA grades determined on goats?

- 
- A** Muscle thickness and Marbling
 - B** Muscling and Bloom
 - C** Yield grade and Loin-eye area
 - D** Loin-eye area and Muscle thickness

What is driving the demand for goat meat?

- A Fast Food Restaurants
- B School Cafeterias
- C Ethnic and Religious Groups
- D Catering Businesses

In regards to reproduction, what does BSE stand for?

- A Bovine Spongiform Encephalitis
- B Breeding Soundness Exam
- C Breeding Soundness Evaluation
- D Breeding Season Evaluation

What does a scrapie tag identify?

- A Age of the animal
- B Breed of the animal
- C Breeder of the animal
- D Sire of the animal

What is the top goat producing state?

A

Kentucky

B

Texas

C

California

D

Oklahoma

What does the term inflection point mean?

- A The location where vaccinations are given.
- B The Puberty-point where fat starts to increase.
- C The period in time when does are ready to be bred.
- D The period in time when kids are ready to be weaned from their mother.

*All of these parts are located in the
hindsaddle of a kid except _____.*

A

Loin

B

Rump

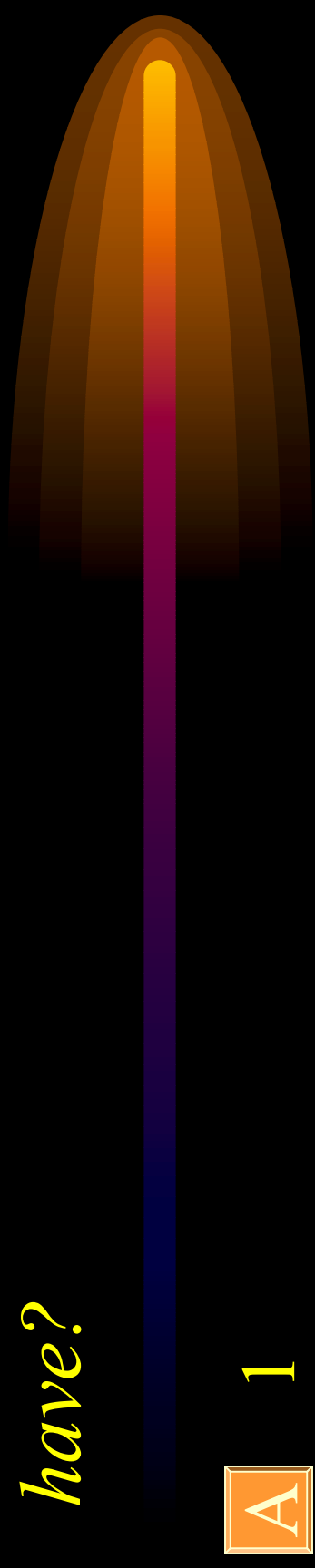
C

Rack

D

Leg

How many udder sections does a doe have?



A

1

B

2

C

4

D

6

About _____ percent of the red meat consumed world wide is goat.

- A 20
- B 30
- C 50
- D 60

Which of the following is not a true breed with an association and standardized meat breed characteristics?

- A Spanish**
- B Tennessee Fainting Goat**
- C Kiko**
- D Boer**

Which USDA Slaughter Grade is best described?

* Slaughter kid exhibits at least average meat type conformation, possess moderate amount of finish over the ribs, back, and loin, will express at least average muscling in the leg and loin.

A #1

C #3

B #2

D #4